

- Balonların üzerinde toplama işlemleri yazılmıştır. Toplama işlemi yanlış olan balonları mor renge boyayalım.

$$\begin{array}{r} 8 \\ + 1 \\ \hline 10 \end{array}$$

$$\begin{array}{r} 4 \\ + 3 \\ \hline 7 \end{array}$$

$$\begin{array}{r} 6 \\ + 2 \\ \hline 9 \end{array}$$

$$\begin{array}{r} 5 \\ + 5 \\ \hline 10 \end{array}$$

$$\begin{array}{r} 2 \\ + 4 \\ \hline 8 \end{array}$$

$$\begin{array}{r} 3 \\ + 3 \\ \hline 6 \end{array}$$

$$\begin{array}{r} 7 \\ + 3 \\ \hline 12 \end{array}$$

$$\begin{array}{r} 1 \\ + 6 \\ \hline 7 \end{array}$$

- Aşağıdaki toplama işlemlerini yapalım. Doğru yaptığımız işlemlerin yıldızlarını sarıya boyayalım.

1.
$$\begin{array}{r} 2 \\ + 3 \\ \hline \end{array}$$



2.
$$\begin{array}{r} 1 \\ + 4 \\ \hline \end{array}$$



3.
$$\begin{array}{r} 2 \\ + 2 \\ \hline \end{array}$$



4.
$$\begin{array}{r} 3 \\ + 7 \\ \hline \end{array}$$



5.
$$\begin{array}{r} 8 \\ + 4 \\ \hline \end{array}$$



6.
$$\begin{array}{r} 9 \\ + 0 \\ \hline \end{array}$$



7.
$$\begin{array}{r} 8 \\ + 6 \\ \hline \end{array}$$



8.
$$\begin{array}{r} 9 \\ + 5 \\ \hline \end{array}$$



9.
$$\begin{array}{r} 3 \\ + 4 \\ \hline \end{array}$$



10.
$$\begin{array}{r} 9 \\ + 9 \\ \hline \end{array}$$



11.
$$\begin{array}{r} 6 \\ + 5 \\ \hline \end{array}$$



12.
$$\begin{array}{r} 7 \\ + 5 \\ \hline \end{array}$$



13.
$$\begin{array}{r} 7 \\ + 0 \\ \hline \end{array}$$



14.
$$\begin{array}{r} 5 \\ + 5 \\ \hline \end{array}$$



15.
$$\begin{array}{r} 8 \\ + 3 \\ \hline \end{array}$$



16.
$$\begin{array}{r} 6 \\ + 4 \\ \hline \end{array}$$



17.
$$\begin{array}{r} 6 \\ + 6 \\ \hline \end{array}$$



18.
$$\begin{array}{r} 0 \\ + 5 \\ \hline \end{array}$$



Boyadığım Yıldız Sayısı



- Sayıları aşağıya doğru toplayarak görsellere karşılık gelen sayıyı bulalım. Görsellerin altındaki kutucuğa sayıları yazalım.

$$\begin{array}{c} 4 + 2 + 6 \\ \downarrow \quad \downarrow \\ 6 + 8 \\ \downarrow \\ \square \end{array}$$

$$\begin{array}{c} 1 + 5 + 6 \\ \downarrow \quad \downarrow \\ \dots + \dots \\ \downarrow \\ \bullet \end{array}$$

$$\begin{array}{c} 8 + 1 + 5 \\ \downarrow \quad \downarrow \\ \dots + \dots \\ \downarrow \\ \diamond \end{array}$$

$$\begin{array}{c} 2 + 7 + 1 \\ \downarrow \quad \downarrow \\ \dots + \dots \\ \downarrow \\ \blacktriangle \end{array}$$

$$\begin{array}{c} 4 + 5 + 4 \\ \downarrow \quad \downarrow \\ \dots + \dots \\ \downarrow \\ \blacklozenge \end{array}$$










$$\begin{array}{c} 3 + 4 + 2 \\ \downarrow \quad \downarrow \\ \dots + \dots \\ \downarrow \\ \text{☼} \end{array}$$

$$\begin{array}{c} 3 + 1 + 5 \\ \downarrow \quad \downarrow \\ \dots + \dots \\ \downarrow \\ \text{✱} \end{array}$$

$$\begin{array}{c} 3 + 4 + 5 \\ \downarrow \quad \downarrow \\ \dots + \dots \\ \downarrow \\ \star \end{array}$$

$$\begin{array}{c} 3 + 3 + 3 \\ \downarrow \quad \downarrow \\ \dots + \dots \\ \downarrow \\ \text{☼} \end{array}$$

Şifre:

- Sayılarla görselleri eşleştirip toplama işlemlerini yapalım.



$$\text{Zebra} + \text{Cat} = \boxed{9}$$

$$\text{Hedgehog} + \text{Hedgehog} = \boxed{\dots\dots}$$

$$\text{Rabbit} + \text{Dolphin} = \boxed{\dots\dots}$$

$$\text{Snake} + \text{Butterfly} = \boxed{\dots\dots}$$

$$\text{Monkey} + \text{Turtle} = \boxed{\dots\dots}$$

$$\text{Dog} + \text{Dolphin} = \boxed{\dots\dots}$$

$$\text{Cat} + \text{Hedgehog} = \boxed{\dots\dots}$$

$$\text{Zebra} + \text{Cat} = \boxed{\dots\dots}$$

$$\text{Dog} + \text{Hedgehog} = \boxed{\dots\dots}$$

$$\text{Rabbit} + \text{Snake} = \boxed{\dots\dots}$$

$$\text{Dolphin} + \text{Cat} = \boxed{\dots\dots}$$

$$\text{Monkey} + \text{Hedgehog} = \boxed{\dots\dots}$$

$$\text{Turtle} + \text{Snake} = \boxed{\dots\dots}$$

$$\text{Butterfly} + \text{Butterfly} = \boxed{\dots\dots}$$

$$\text{Dog} + \text{Rabbit} = \boxed{\dots\dots}$$

$$\text{Turtle} + \text{Zebra} = \boxed{\dots\dots}$$

- Aşağıdaki toplama işlemlerini yapalım. Doğru yaptığımız işlemlerin yıldızını boyyalım.

1. 11

$$\begin{array}{r} 11 \\ + 4 \\ \hline \end{array}$$

.....



2. 14

$$\begin{array}{r} 14 \\ + 3 \\ \hline \end{array}$$

.....



3. 19

$$\begin{array}{r} 19 \\ + 0 \\ \hline \end{array}$$

.....



4. 18

$$\begin{array}{r} 18 \\ + 2 \\ \hline \end{array}$$

.....



5. 10

$$\begin{array}{r} 10 \\ + 8 \\ \hline \end{array}$$

.....



6. 9

$$\begin{array}{r} 9 \\ + 0 \\ \hline \end{array}$$

.....



7. 12

$$\begin{array}{r} 12 \\ + 5 \\ \hline \end{array}$$

.....



8. 11

$$\begin{array}{r} 11 \\ + 6 \\ \hline \end{array}$$

.....



9. 17

$$\begin{array}{r} 17 \\ + 2 \\ \hline \end{array}$$

.....



10. 9

$$\begin{array}{r} 9 \\ + 9 \\ \hline \end{array}$$

.....



11. 16

$$\begin{array}{r} 16 \\ + 1 \\ \hline \end{array}$$

.....



12. 14

$$\begin{array}{r} 14 \\ + 5 \\ \hline \end{array}$$

.....



13. 14

$$\begin{array}{r} 14 \\ + 4 \\ \hline \end{array}$$

.....



14. 10

$$\begin{array}{r} 10 \\ + 6 \\ \hline \end{array}$$

.....



15. 16

$$\begin{array}{r} 16 \\ + 2 \\ \hline \end{array}$$

.....



16. 11

$$\begin{array}{r} 11 \\ + 5 \\ \hline \end{array}$$

.....



17. 10

$$\begin{array}{r} 10 \\ + 4 \\ \hline \end{array}$$

.....



18. 14

$$\begin{array}{r} 14 \\ + 3 \\ \hline \end{array}$$


.....



Doğru Sayısı:

Yanlış Sayısı:

- Ali okula giderken toplamı 20 olan kutucuklara basıyormuş. Ali'yi okula ulaştıran kutucukları boyayıp yolu gösterelim.

	$11 + 2$	$7 + 8$	$4 + 2$	$11 + 6$	$8 + 8$
$10 + 10$	$7 + 4$	$6 + 6$	$11 + 6$	$5 + 12$	$19 + 0$
$15 + 5$	$17 + 3$	$19 + 1$	$16 + 4$	$1 + 9$	$31 + 2$
$4 + 12$	$16 + 1$	$15 + 3$	$12 + 8$	$13 + 5$	$9 + 9$
$8 + 11$	$14 + 4$	$14 + 6$	$17 + 3$	$3 + 3$	$7 + 8$
$18 + 0$	$6 + 13$	$20 + 0$	$4 + 11$	$5 + 2$	$9 + 6$
$7 + 11$	$5 + 1$	$11 + 9$	$13 + 7$	$18 + 2$	$3 + 12$
$9 + 8$	$2 + 2$	$12 + 5$	$14 + 4$	$1 + 19$	$7 + 3$
$13 + 3$	$16 + 1$	$7 + 3$	$5 + 5$	$3 + 17$	$7 + 13$
$8 + 10$	$13 + 1$	$1 + 11$	$10 + 3$	$5 + 9$	