




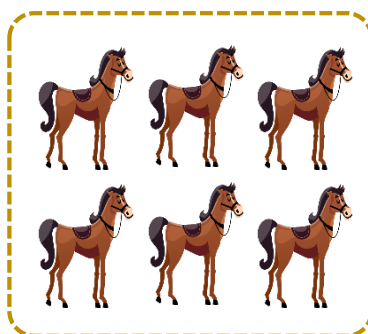
I. SINIF MATEMATİK

Sayıları Tanıyalım - II

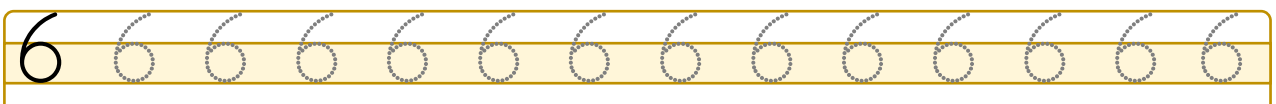
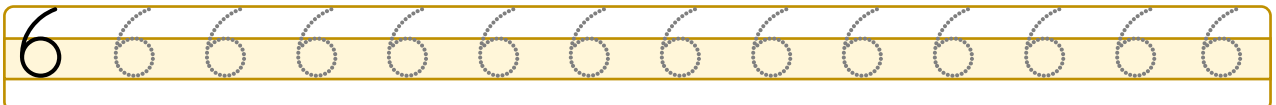
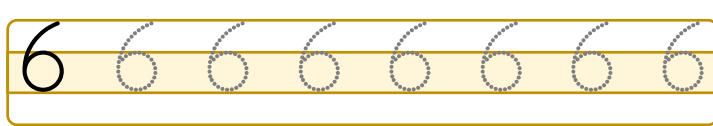
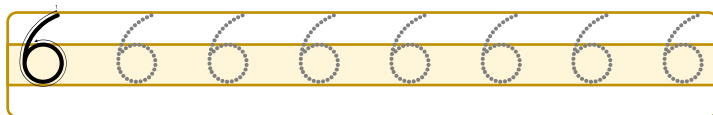


Adı Soyadı : Sınıfı : No :

★ Aşağıdaki görselleri öğrencimizle birlikte inceleyelim. Öğrencimizden içinde 6 tane varlık olan kutucukları işaretlemesini isteyelim.



★ Öğrencimizden rakamı yazılış yönüne dikkat ederek yazmasını isteyelim.





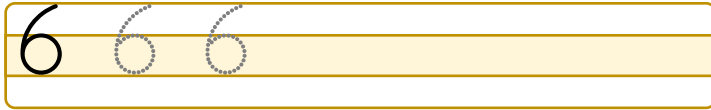
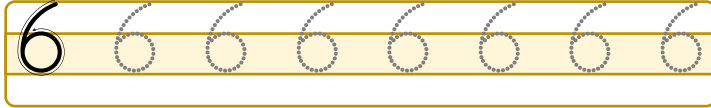
I. SINIF MATEMATİK

Sayıları Tanıyalım - 12



Adı Soyadı : Sınıfı : No :

★ Öğrencimizden rakamı yazılış yönüne dikkat ederek yazmasını isteyelim.



★ Öğrencimizden aşağıdaki misketlerden 6 tanesini yuvarlak içine almasını isteyelim.








I. SINIF MATEMATİK

Sayıları Tanıyalım - 13

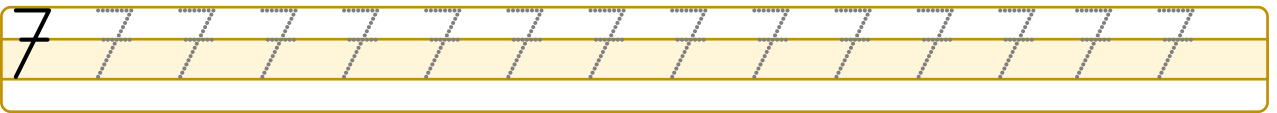
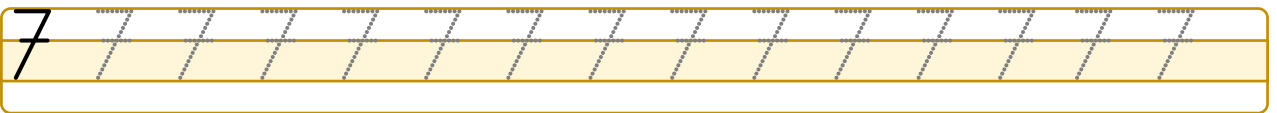
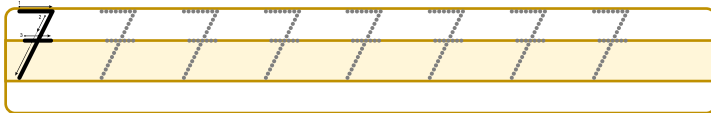
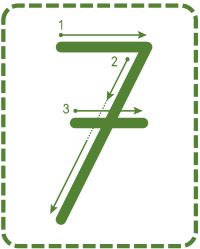


Adı Soyadı : Sınıfı : No :

★ Aşağıdaki görselleri öğrencimizle birlikte inceleyelim. Öğrencimizden içinde 7 tane varlık olan kutucukları işaretlemesini isteyelim.



★ Öğrencimizden rakamı yazılış yönüne dikkat ederek yazmasını isteyelim.





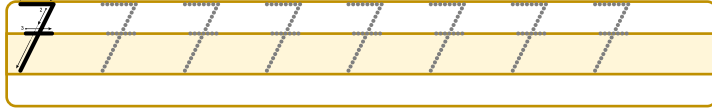

I. SINIF MATEMATİK

Sayıları Tanıyalım - 14

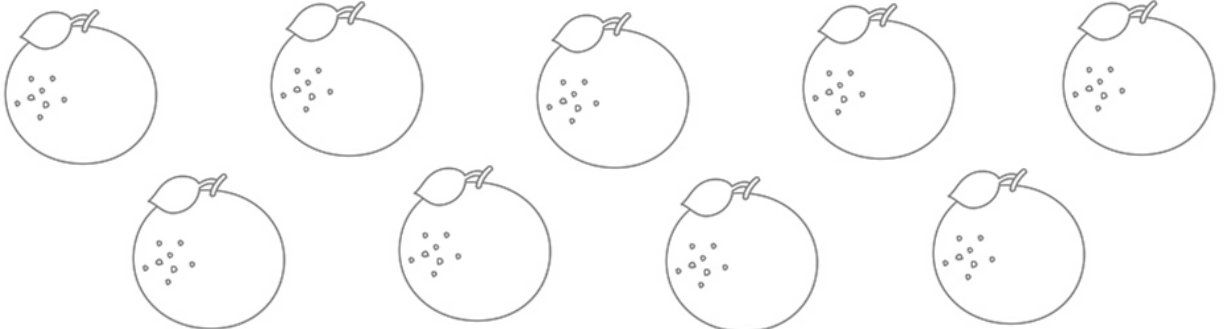


Adı Soyadı : Sınıfı : No :

★ Öğrencimizden rakamı yazılış yönüne dikkat ederek yazmasını isteyelim.







★ Öğrencimizden aşağıdaki portakallardan 7 tanesini boyamasını isteyelim.



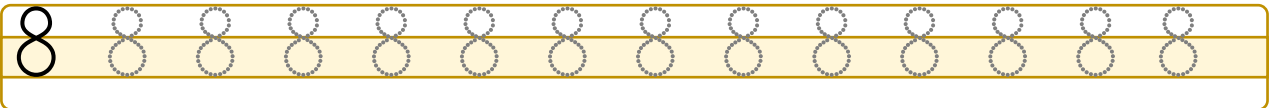
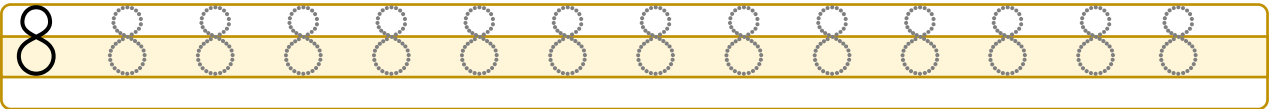
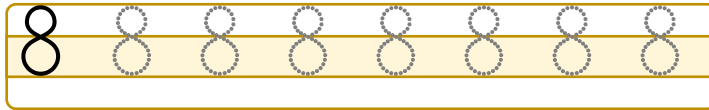
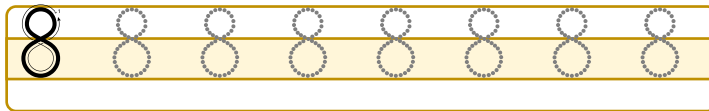



Adı Soyadı : Sınıfı : No :

★ Aşağıdaki görselleri öğrencimizle birlikte inceleyelim. Öğrencimizden içinde 8 tane varlık olan kutucukları işaretlemesini isteyelim.



★ Öğrencimizden rakamı yazılış yönüne dikkat ederek yazmasını isteyelim.





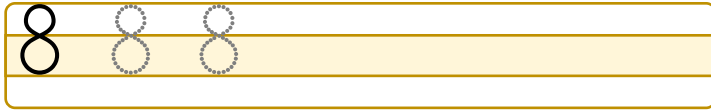
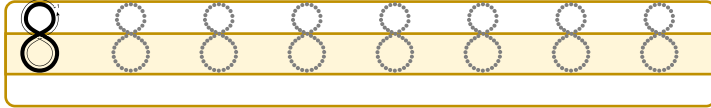

I. SINIF MATEMATİK

Sayıları Tanıyalım - 16



Adı Soyadı : Sınıfı : No :

★ Öğrencimizden rakamı yazılış yönüne dikkat ederek yazmasını isteyelim.







★ Öğrencimizden aşağıdaki toplardan 8 tanesini yuvarlak içine almasını isteyelim.



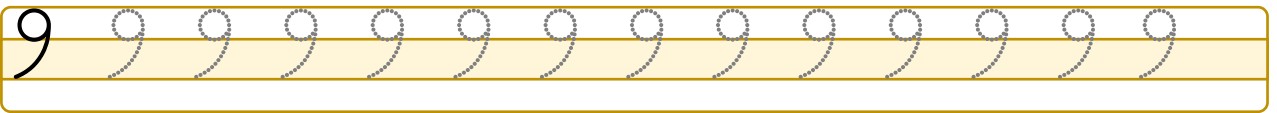
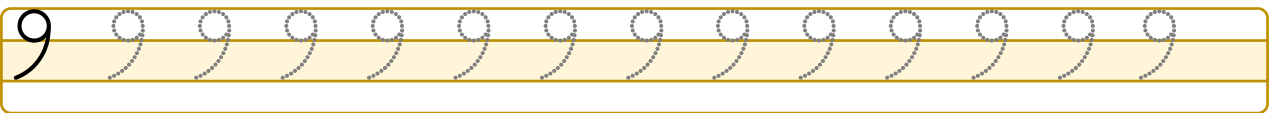
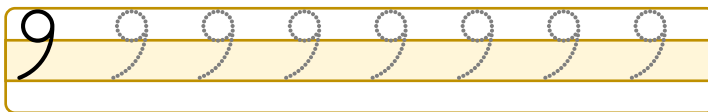
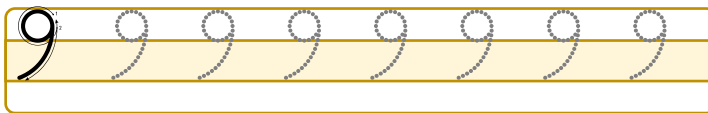


Adı Soyadı : Sınıfı : No :

★ Aşağıdaki görselleri öğrencimizle birlikte inceleyelim. Öğrencimizden içinde 9 tane varlık olan kutucukları işaretlemesini isteyelim.



★ Öğrencimizden rakamı yazılış yönüne dikkat ederek yazmasını isteyelim.






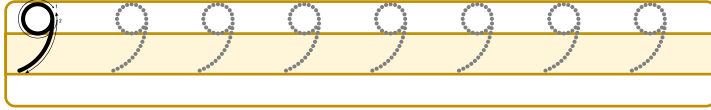
I. SINIF MATEMATİK

Sayıları Tanıyalım - 18




Adı Soyadı : Sınıfı : No :

★ Öğrencimizden rakamı yazılış yönüne dikkat ederek yazmasını isteyelim.



★ Öğrencimizden aşağıdaki havuçlardan 9 tanesini boyamasını isteyelim.





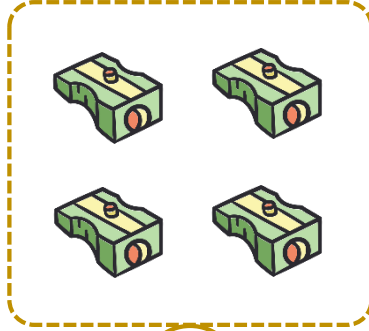


I. SINIF MATEMATİK

Sayıları Tanıyalım - 19

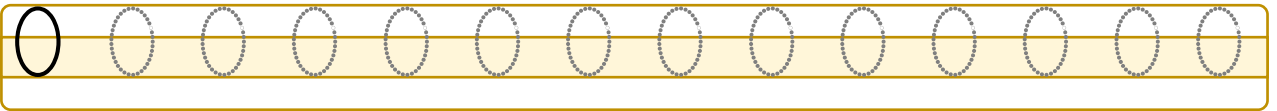
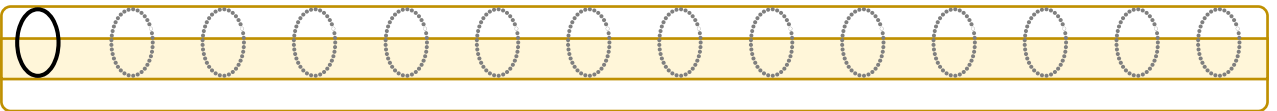

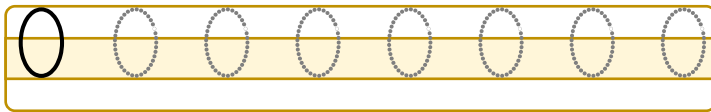
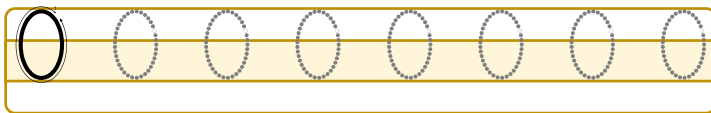
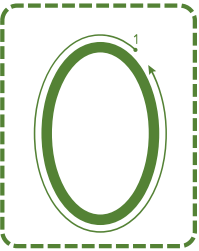


Adı Soyadı : Sınıfı : No :

★ Aşağıdaki görselleri öğrencimizle birlikte inceleyelim. Öğrencimizden içinde 0 tane varlık olan kutucukları işaretlemesini isteyelim.



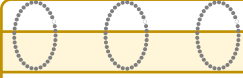

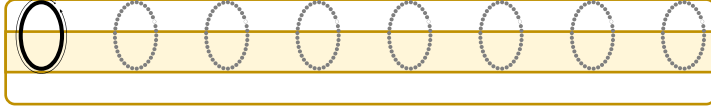
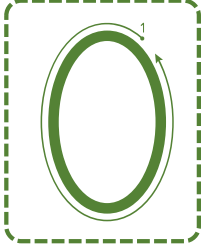
★ Öğrencimizden rakamı yazılış yönüne dikkat ederek yazmasını isteyelim.





Adı Soyadı : Sınıfı : No :

★ Öğrencimizden rakamı yazılış yönüne dikkat ederek yazmasını isteyelim.



★ Öğrencimizden aşağıdaki tabaklardan içinde hiç elma olmayanları yuvarlak içine almasını isteyelim.

